
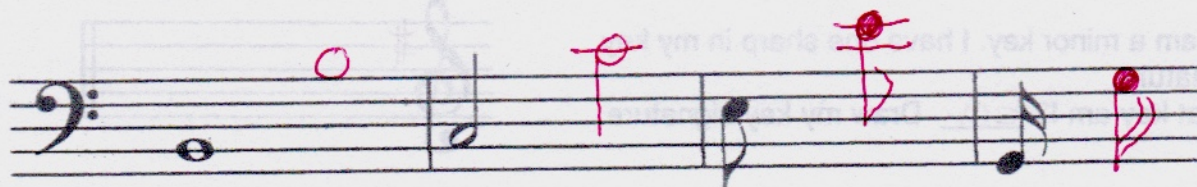





Up And Down



Write a note 8va higher. Check stem direction.
Flags always fly to the right.



Write a note 8vb lower.






Check The Clues


1. I am a major key. I have two sharps in my key signature.

What key am I? D Draw my key signature.




2. I am a major key. I have one flat in my key signature.

What key am I? F Draw my key signature.




3. I am a minor key. I have one sharp in my key signature.

What key am I? Em Draw my key signature.




4. I am a major key. I have one sharp in my key signature.

What key am I? G Draw my key signature.




5. I am a minor key. I have no sharps or flats in my key signature.

What key am I? Am Draw my key signature.




6. I am a minor key. I have two sharps in my key signature.

What key am I? Bm Draw my key signature.




7. I am a major key. I have no sharps or flats in my key signature.

What key am I? Am Draw my key signature.



8. I am a minor key. I have one flat in my key signature.

What key am I? Dm Draw my key signature.






Scale Details

Name of scale B^b major

Does it have accidentals? no

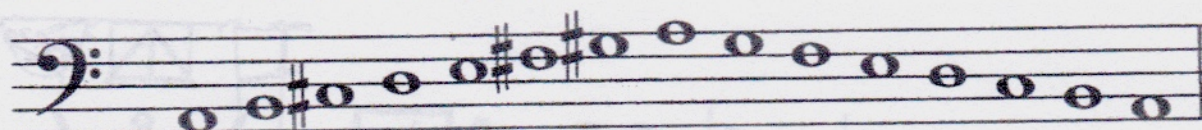
Does it have a key signature? yes



Name of scale A major

Does it have accidentals? yes


Does it have a key signature? no



Name of scale E major

Does it have accidentals? no


Does it have a key signature? yes



Name of scale G major



Does it have accidentals? yes

Does it have a key signature? no



Barnyard Fun

Add the correct time signature.





Nap Time

C. Ruskin Sandbourne

Andante

1

5

9

13

molto ritard - - - - -

Nap Time

Analyze the following piece of music by answering the questions below.

i. Name the key of this piece A minor

ii. Add the correct time signature directly on the music.

iii. Add rests as necessary in measures 1 & 2

iv. Explain the meaning of Andante slow, at a walking pace

v. Name the intervals at the following letters

A P8

B P4

C m6

D M6

vi. Find and label directly on the music

- a diatonic semitone half step - Any half step with 2 different note names E.g. "C-B"
- a staccato - note with dot above or below
- a slur - usually 2-5 notes.
- a phrase - more than 2 notes
- an accidental

by any #

Lots of options! Use below to mark

These 2 could be the same in this song except slurs with only 2 notes.

